

**FOR CLASS 12TH (EXCEL)
SAMPLE TEST (NM)**

Time: 1 Hr

Max Marks : 120

SYLLABUS & SCHEME		
SUBJECTS	Qs.	SYLLABUS
PHYSICS	10	Units & Dimensions, Kinematics, Newton's Laws of Motion, WPE, COM, Rotation
CHEMISTRY	10	Atomic Structure, Mole Concept, Gaseous State, Periodic Classification, Chemical Bonding, Thermodynamics, Chemical Equilibrium, Ionic Equilibrium, Redox Reactions
MATHEMATICS	10	Sets, Quadratic Equations, Binomial Theorem, Sequence and Series, Straight Lines, Trigonometry

INSTRUCTIONS TO CANDIDATE

- Each subject in this paper consists of multiple choice questions with only one correct answer. **+4 marks** will be awarded for correct answer and **-1 mark** for wrong answer.
- Please read the instructions given for each question carefully and fill the correct answer against the question numbers on the answer sheet in the respective subject.
- Use blue or black ball point pen to darken the appropriate circle & mark should completely fill the circle.
- The Question paper contains blank spaces for your rough work. No additional sheet will be provided for rough work.
- Blank papers, Clipboards, Log Tables, Slide rule, Calculators, Cellular phones, Pagers and Electronic gadgets in any form are not allowed.
- Write your Name, Student ID in the block at the top of the Answer Sheet. Also write your Name & Student ID in the space provided on this cover page of question paper.
- **This test paper is just an indicative of the actual test. Total number and type of questions in actual test may vary.**

Name: _____ Student ID _____

PHYSICS

1. From the equation, $\tan \theta = \frac{rg}{v^2}$, one can obtain the angle of banking θ for a cyclist taking a curve. The symbols have their usual meanings. They say it is

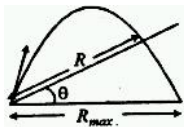
- (A) both dimensionally and numerically correct
 (B) dimensionally correct only
 (C) numerically correct only
 (D) neither numerically nor dimensionally correct

2. The distance between two moving cars A and B at a particular time is d . Their relative velocity is V with the component along AB being u perpendicular to AB being v . The time that elapses before they arrive at their nearest distance is

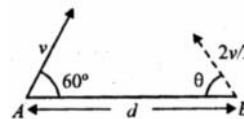
- (A) $\frac{du}{V^2}$ (B) $\frac{dv}{V^2}$
 (C) $\frac{d(u+v)}{V^2}$ (D) $\frac{dV}{(u+v)^2}$

3. A particle is projected for its maximum range R_{\max} . If an inclined plane whose inclination to the horizontal is θ , intercepts the parabolic path of the particle, then the range R along the plane will be

- (A) $\sqrt{2} R_{\max} \frac{\sin(\pi/4 - \theta)}{\cos^2 \theta}$
 (B) $2R_{\max} \frac{\cos(\pi/4 - \theta) \sin \theta}{\cos^2 \theta}$
 (C) $2R_{\max} \frac{\sin(\pi/4 - \theta) \cos \theta}{\sin^2 \theta}$
 (D) $2R_{\max} \frac{\sin(\pi/4 - \theta) \cos \theta}{\sin \theta}$



4. A rat and a cat are at a distance d apart. The rat moves at a speed v , making an angle 60° , to the line joining the rat 'A' and the cat 'B' at the same instant, the cat chases the rat with a speed $\frac{2v}{3}$ and angle θ to the line AB. Which of the following is true?



- (A) For the cat to catch the rat in the least time,

θ should be $\sin^{-1}\left(\frac{3}{8}\right)$

- (B) The least time in which the cat gets hold of the rat is $\frac{d}{2v}$

- (C) Proceeding at $\theta = 30^\circ$, the cat is able to catch the rat after $\frac{3d}{2v}$


- (D) The cat can never intercept the rat

5. A homogeneous chain of length L lies on a table. The coefficient of friction between the chain and the table is μ . The maximum length which can hang over the table in equilibrium is :


- (A) $\left(\frac{\mu}{\mu+1}\right)L$ (B) $\left(\frac{1-\mu}{\mu}\right)L$
 (C) $\left(\frac{1-\mu}{1+\mu}\right)L$ (D) $\left(\frac{2\mu}{2\mu+1}\right)L$

6. A trolley is being pulled up on incline plane by a man sitting on it (as shown in figure). He applies a force of 250 N . If the combined mass of the man and trolley is 100 kg , the acceleration of the trolley will be ($g = 10\text{ m/s}^2$, $\sin 15^\circ = 0.26$)

- (A) 2.4 m/s^2
 (B) 9.4 m/s^2
 (C) 6.9 m/s^2
 (D) 4.9 m/s^2



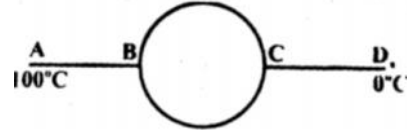
7. A body floats in a liquid contained in a beaker. The whole system as shown in figure falls freely under gravity. The upthrust on the body is



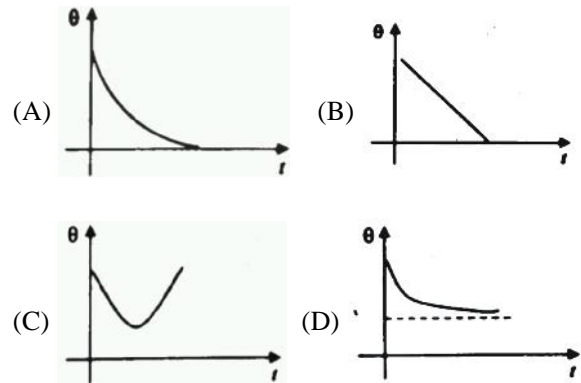
- (A) zero
 (B) equal to the weight of liquid displaced
 (C) equal to the weight of the body in air
 (D) equal to the weight of the immersed portion of the body
8. A uniform pressure P is exerted on all sides of a solid cube. It is heated through Δt° in order to bring its volume back to the value it had before the application of pressure. Then where χ is cubical coefficient of expansion .

(A) $\Delta t = \frac{P}{B\chi}$ (B) $\Delta t = \frac{B}{P\chi}$
 (C) $\Delta t = B\chi P$ (D) $\Delta t = \frac{B\chi}{P}$

9. Two identical conducting rods AB and CD are connected to a circular conducting ring at two diametrically opposite points B and C . The radius of the ring is equal to the length of rods AB and CD . The area of cross section and thermal conductivity of the rod and ring are equal. Points A and D are maintained at temperature of $100^\circ C$ and $0^\circ C$. Temperature of point C will be



- (A) $62^\circ C$ (B) $37^\circ C$
 (C) $28^\circ C$ (D) $45^\circ C$
10. A conducting sphere cools in atmosphere according to Newton's law of cooling. The correct graph between its temperature θ and time t is



CHEMISTRY

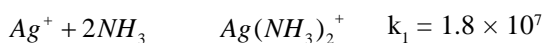
11. An electron travels with a velocity of $x \text{ ms}^{-1}$. For a proton to have the same de Broglie wavelength, the velocity will be approximately?

(A) $\frac{1840}{x}$ (B) $\frac{x}{1840}$
 (C) $1840x$ (D) x

12. The compressibility factor of helium as a real gas is

(A) unity (B) $1 - \frac{a}{RTV}$
 (C) $1 + \frac{Pb}{RT}$ (D) $\frac{RTV}{1-a}$

13. For the given equilibrium

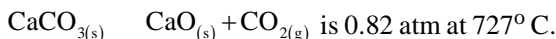


Then, what would be the equilibrium constant for process given below



(A) 10^{-17} (B) 3.1×10^{-22}
 (C) 3.2×10^{-3} (D) 10^{17}

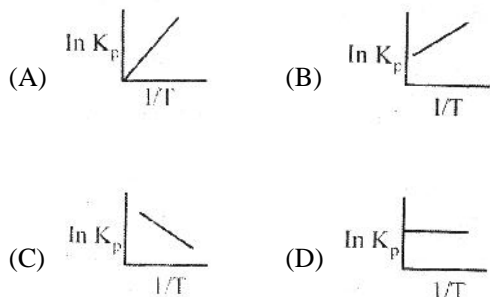
14. Equilibrium constant K_p for the reaction



If 1 mole of CaCO_3 is placed in a closed container of 20L and heated to this temperature, what amount of CaCO_3 would dissociate at equilibrium?

(A) 0.2 g (B) 80 g
 (C) 20 g (D) 50 g

15. An exothermic reaction is represented by the graph

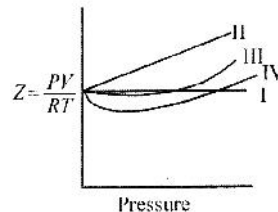


16. Which of the following molecules has planar structure?



17. For the non-zero volume of molecules having no forces of attraction, the variation of compressibility

factor $Z = \frac{PV}{RT}$ with pressure is given by the graph



(A) I (B) II
 (C) III (D) IV

18. Enthalpy of combustion of carbon, hydrogen and C_3H_8 are x_1 , x_2 and $x_3 \text{ mol}^{-1}$ respectively. Estimate the enthalpy of formation of C_3H_8

(A) $x_3 - x_1 - x_2$
 (B) $x_3 - 3x_1 - 4x_2$
 (C) $3x_1 + 4x_2 - x_3$
 (D) $x_1 + x_2 - x_3$

19. Three solution A, B, C of HCl are mixed to produce 100 ml of 0.1 M solution. The molarities of A, B, C are 0.05 M, 0.10 M and 0.15 M respectively. In what ratio can they be mixed?

(A) 55 ml, 20 ml, 25 ml
 (B) 57 ml, 15 ml, 28 ml
 (C) 54 ml, 23 ml, 23 ml
 (D) 23 ml, 54 ml, 23 ml

20. 14 g of N_2 and 36 g of ozone are at the same pressure and temperature. Their volumes will be related as

(A) $2V_{\text{N}_2} = 3V_{\text{O}_3}$ (B) $3V_{\text{N}_2} = 2V_{\text{O}_3}$
 (C) $3V_{\text{N}_2} = 4V_{\text{O}_3}$ (D) $4V_{\text{N}_2} = 3V_{\text{O}_3}$

MATHEMATICS

21. The vertices of a triangle are $A(x_1, x_1 \tan \Gamma)$, $B(x_2, x_2 \tan S)$ and $C(x_3, x_3 \tan \chi)$. If the triangle ABC coincides with the origin and $H(a, b)$ be its orthocentre then $\frac{a}{b} =$
- (A) $\frac{\cos \Gamma + \cos S + \cos \chi}{\cos \Gamma \cdot \cos S \cdot \cos \chi}$
- (B) $\frac{\sin \Gamma + \sin S + \sin \chi}{\sin \Gamma \cdot \sin S \cdot \sin \chi}$
- (C) $\frac{\tan \Gamma + \tan S + \tan \chi}{\tan \Gamma \cdot \tan S \cdot \tan \chi}$
- (D) $\frac{\cos \Gamma + \cos S + \cos \chi}{\sin \Gamma + \sin S + \sin \chi}$
22. Let $p, q \in \{1, 2, 3, 4\}$. The number of equations of the form $px^2 + qx + 1 = 0$ having real roots is -
- (A) 15 (B) 9
(C) 7 (D) 8
23. The number of values of x in the interval $[0, 5\pi]$ satisfying the equation $3\sin^2 x - 7\sin x + 2 = 0$ is
- (A) 0 (B) 5
(C) 6 (D) 10
24. Locus of centroid of the triangle whose vertices are $(a \cos t, a \sin t)$, $(b \sin t, -b \cos t)$ and $(1, 0)$, where t is a parameter, is
- (A) $(3x+1)^2 + (3y)^2 = a^2 - b^2$
- (B) $(3x-1)^2 + (3y)^2 = a^2 - b^2$
- (C) $(3x-1)^2 + (3y)^2 = a^2 + b^2$
- (D) $(3x+1)^2 + (3y)^2 = a^2 + b^2$
25. If non-zero numbers a, b, c are in H.P. the straight line $\frac{x}{a} + \frac{y}{b} + \frac{1}{c} = 0$ always passes through a fixed point. That point is
- (A) $(1, -\frac{1}{2})$ (B) $(1, -2)$
- (C) $(-1, -2)$ (D) $(-1, 2)$
26. The sum of the integers from 1 to 100 which are not divisible by 3 or 5 is
- (A) 2489
(B) 4735
(C) 2317
(D) 2632
27. Let $f(x) = ax^2 + bx + c$, $a, b, c \in \mathbf{R}$ and $a \neq 0$. Suppose $f(x) > 0$ for all $x \in \mathbf{R}$. Let $g(x) = f(x) + f'(x) + f''(x)$. Then
- (A) $g(x) > 0 \forall x \in \mathbf{R}$
- (B) $g(x) < 0 \forall x \in \mathbf{R}$
- (C) $g(x) = 0 \forall x \in \mathbf{R}$
- (D) $g(x) = 0$ has real roots.
28. Value of the expression $C_0^2 + 2C_1^2 + \dots + (n+1)C_n^2$ is
- (A) $(2n+1) \binom{2n}{n} C_n$
- (B) $(2n-1) \binom{2n}{n} C_n$
- (C) $\left(\frac{n}{2} + 1\right) \binom{2n}{n} C_n$
- (D) $\left(\frac{n}{2} + 1\right) \binom{2n-1}{n} C_n$
29. $O(0, 0)$, $P(-2, -2)$ and $Q(1, -2)$ are the vertices of a triangle, R is a point on PQ such that $PR : RQ = 2\sqrt{2} : \sqrt{5}$, then OR is
- (A) a median of the triangle
- (B) an altitude of the triangle
- (C) bisector of the angle at O
- (D) none of these
30. On the portion of the straight line $x + y = 2$ which is intercepted between the axes, a square is constructed, away from the origin, with this portion as one of its side. If p denotes the perpendicular distance of a side of this square from the origin, then the maximum value of p is
- (A) $2\sqrt{3}$ (B) $3\sqrt{2}$
- (C) $2/\sqrt{3}$ (D) $3/\sqrt{2}$

ANSWER KEY

PHYSICS

1. (B) 2. (A) 3. (A) 4. (D) 5. (A) 6. (D)
7. (A) 8. (A) 9. (B) 10. (D)

CHEMISTRY

11. (B) 12. (C) 13. (C) 14. (C) 15. (B) 16. (B)
17. (B) 18. (C) 19. (D) 20. (B)

MATHEMATICS

21. (D) 22. (C) 23. (C) 24. (C) 25. (B) 26. (D)
27. (A) 28. (C) 29. (C) 30. (B)